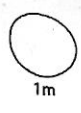


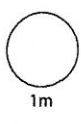
4/8

1

$$\boxed{} + 12.6 = 20$$

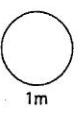


$$2000 - 526 = \boxed{}$$



2


$$18 - (7 + 3) \div 2 = \boxed{}$$




3

Cherries

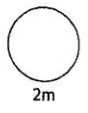
100g costs £1.25



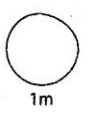
How much for 3kg?



£

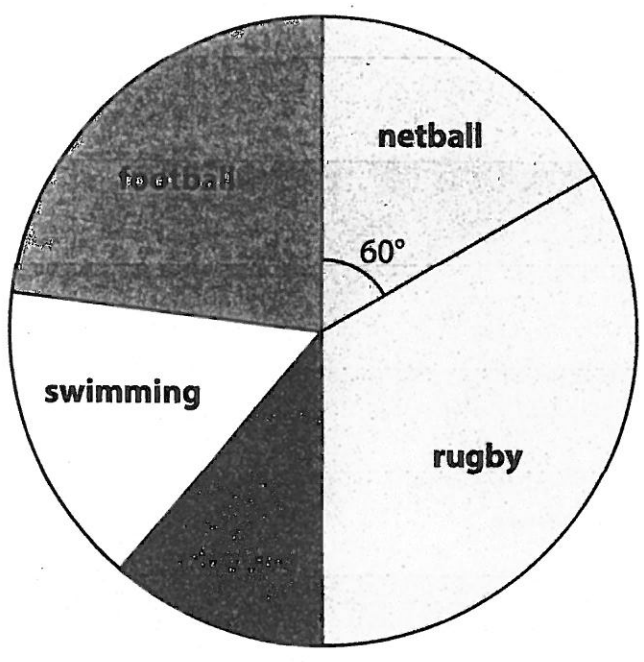


4 Increase 90 by 10%



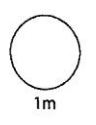
5

Favourite sports

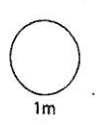


10 children voted for netball.

How many voted for rugby?

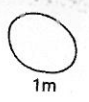


How many voted altogether?

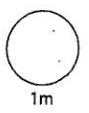


6

$$12 \times 0.3 = \boxed{}$$




$$4.5 \div 9 = \boxed{}$$




7

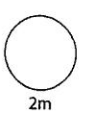
Biscuits
3 packets
for the price of 2



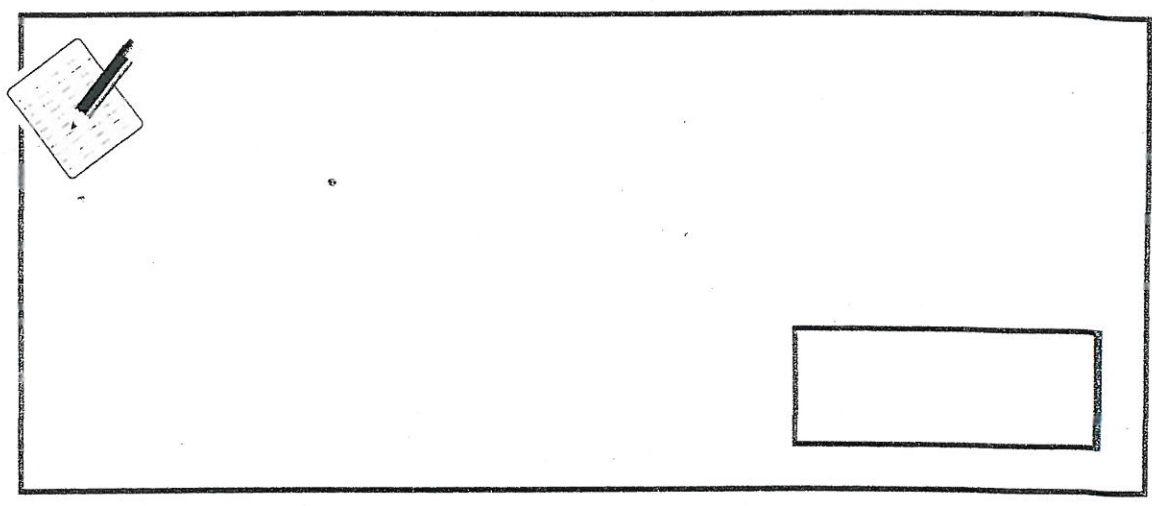
1 packet costs £1.15

How much for 9 packets?

A large rectangular box for writing the answer. In the top-left corner, there is a small icon of a notepad with a pencil. In the bottom-right corner, there is a small rectangular box containing the pound symbol (£).



8 Work out 264×34




2m

9 Write $\frac{1}{8}$ as a decimal.



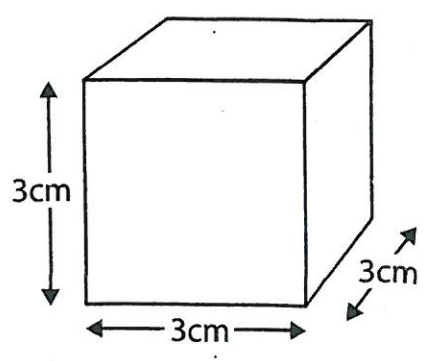
1m

Write 35% as a fraction.



1m

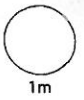
10 Work out the **volume** of the cube.



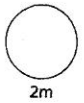
1m

1m

11 Round 256.34505 to two decimal places.



12 Work out $\frac{3}{4} - \frac{1}{3}$



13

Profit from car boot sale



Sita

Shared
5 : 2



Rhys

Sita gets £30

How much does Rhys get?

