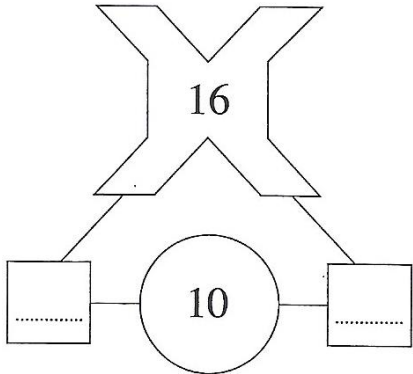


The **sum** of the two numbers in the squares is shown in the circle.

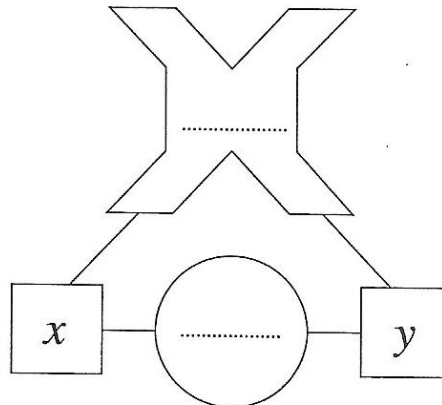
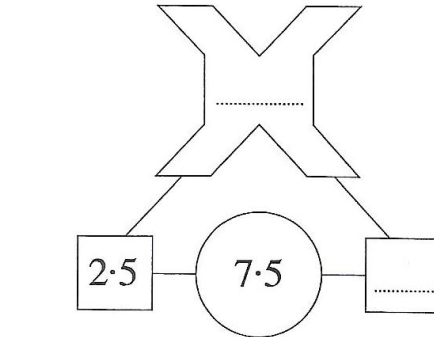
The **product** of the two numbers in the squares is shown in the cross.

a) Complete each of the diagrams below:

## Communicate



Using the same rules, complete this diagram in terms of  $x$  and  $y$ .



## Identify

- What is the key information?
- What do I need to find out?
- What method/maths do I use?

## Review

- Have I answered the question?
- Have I checked my work?